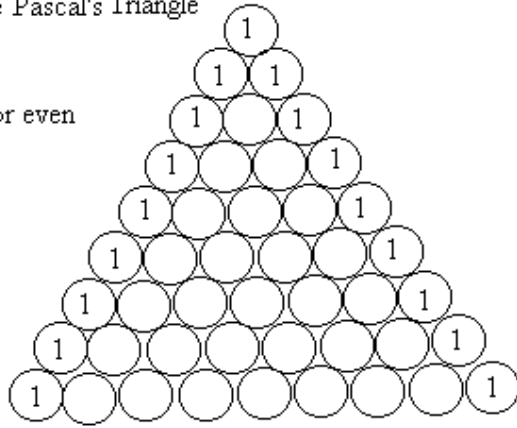


# Patterns in Pascal's Triangle

Complete Pascal's Triangle

Then color even numbers.

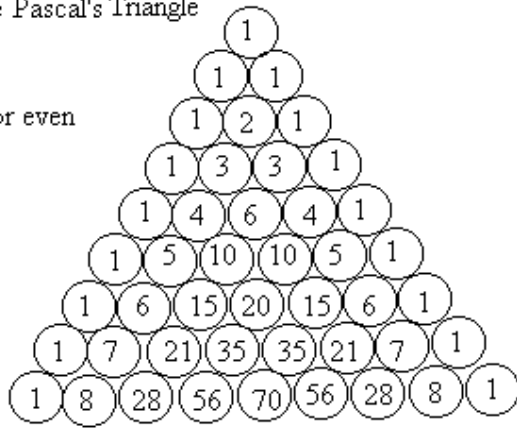


Every position in Pascal's triangle is the sum of the two numbers above it in the previous row.

Fill in the missing numbers.

Complete Pascal's Triangle

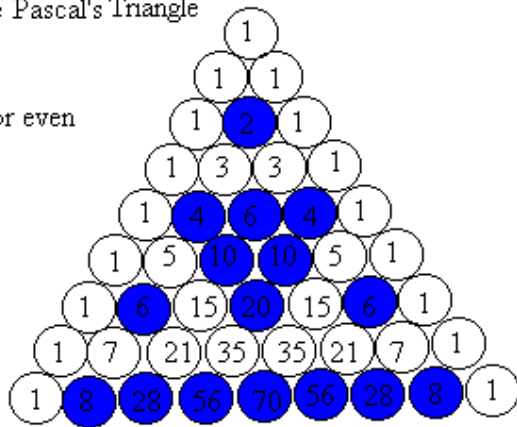
Then color even numbers.



Pick a color for the even numbers and another for the odd numbers.

Complete Pascal's Triangle

Then color even numbers.



Use software to examine the patterns formed by the multiples of other numbers.

See if you can see any patterns.